

The Farmers' Museum  
**Triangle Worksheet**

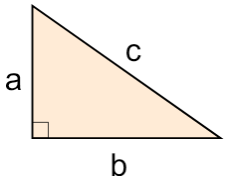
Name \_\_\_\_\_

Date \_\_\_\_\_

Instructions: Identify each of the triangles shown below by writing either **right** triangle, **acute** triangle, or **obtuse** triangle on the line provided. Then, explain why it is that type of triangle.

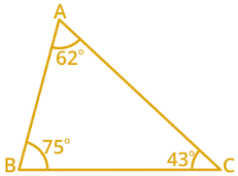
1. The triangle shown below is a(n) \_\_\_\_\_.

Explain:



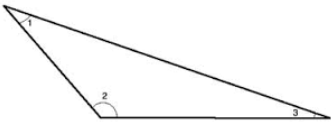
2. The triangle shown below is a(n) \_\_\_\_\_.

Explain:



3. The triangle shown below is a(n) \_\_\_\_\_.

Explain:



4. What type of triangle is shown in this quilt block? \_\_\_\_\_.

Explain:



5. What type of triangle is shown in this quilt block? Explain:

